

Angles and Angle Measure

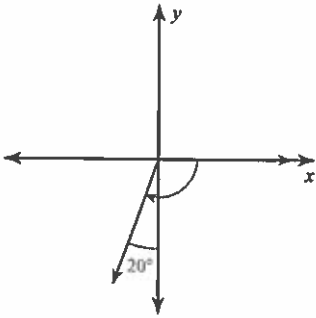
Trig BB1

Name _____

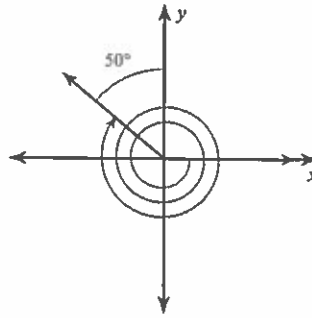
Date _____ Period _____

Find the measure of each angle.

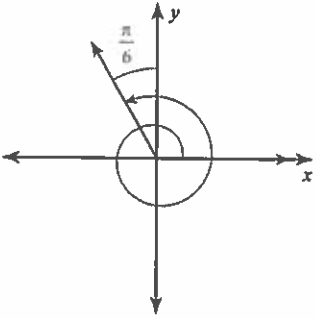
1)



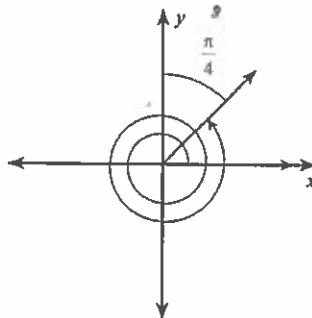
2)



3)

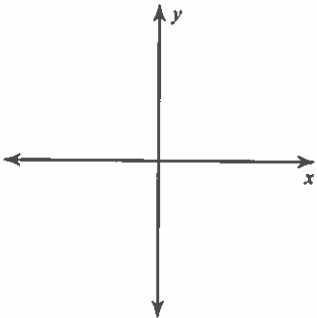


4)

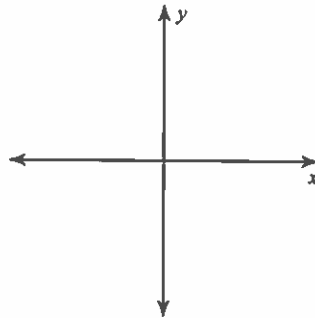


Draw an angle with the given measure in standard position.

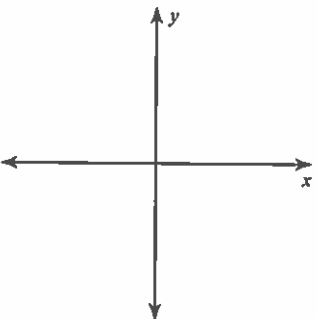
5) $\frac{5\pi}{4}$



6) $-\frac{47\pi}{18}$



7) 170°



8) 510°

