


THIRD GRADE BLIZZARD BAG #1



NAME: _____

DATE: _____

Name _____ Date _____



Write the plural form of each noun. Then use the plural nouns to fill in the blanks below.

- | | |
|-----------------|---------------|
| 1. saddle _____ | herd _____ |
| 2. horse _____ | hoof _____ |
| 3. bronco _____ | bandage _____ |
| 4. ribbon _____ | hat _____ |
| 5. goose _____ | spur _____ |
| 6. rein _____ | boot _____ |

One day, after I had been riding _____ for years, I had the chance to go on a real cattle drive. I was so excited to be riding with real cowboys. We would look great from the _____ on our head to the _____ and _____ on our feet. When I arrived at the barn the horses were in the field looking like bucking _____. This would not be like the horse shows in which _____ flowed from the horse's mane, this was about the _____ of cattle that had to be moved. I watched as _____ were placed on every horse and cinched tight. I climbed on, grabbed my _____, and settled in for the ride. The cattle drive was fun. As we rode home, I watched a flock of _____ fly overhead when suddenly my horse began to limp. I climbed off to check his _____. He had stepped on something sharp, but would be fine with a few small _____ and some rest.

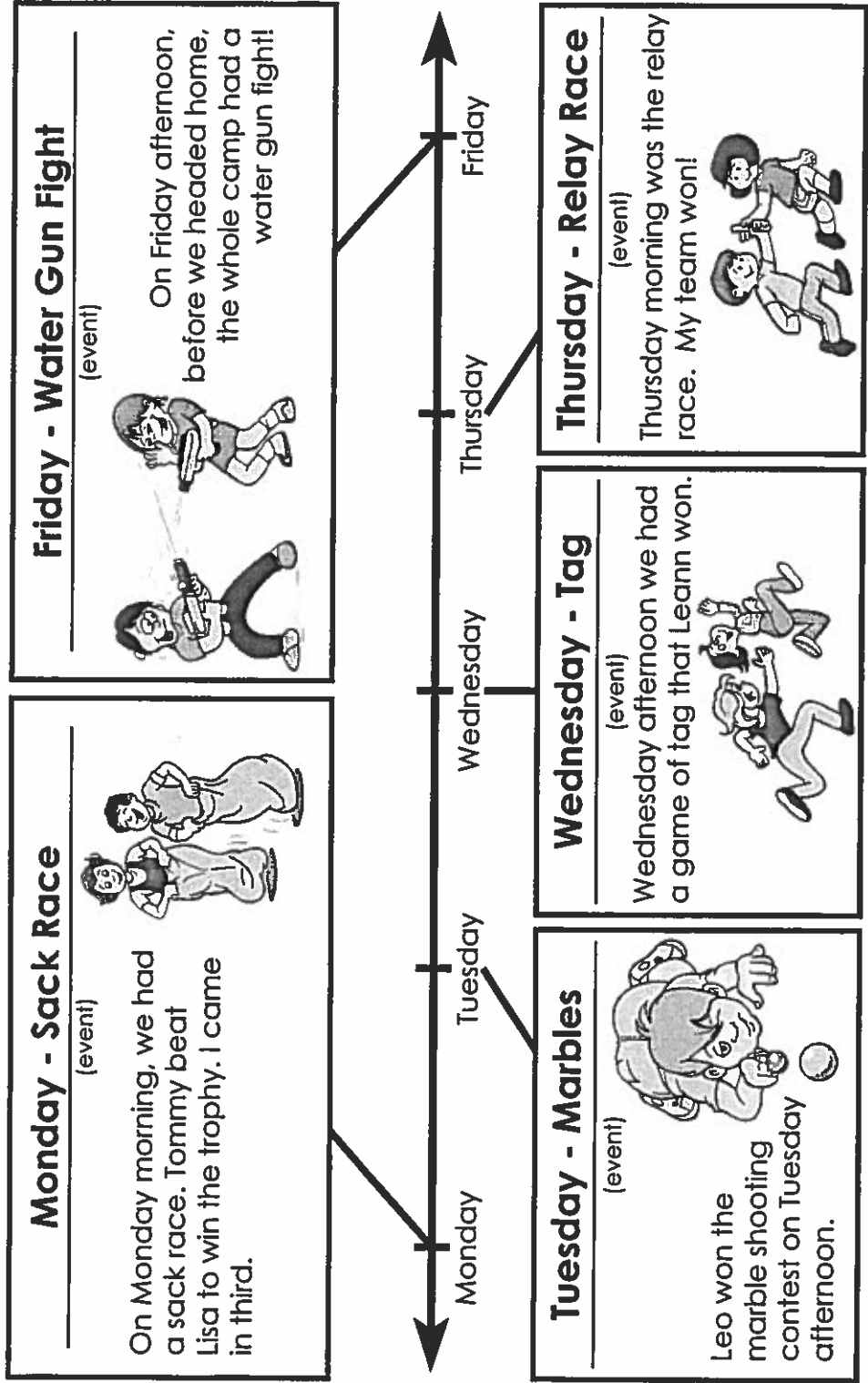
Name: _____

Reading a Timeline

A timeline is a type of chart that shows events in the order they happen. Some timelines show basic information, like dates or times. Others describe each event on the timeline or have pictures to show what happened at each event.

Elise attended a 5-day summer camp. She made a timeline to show which activities she participated in.

My Week at Summer Camp



Use the time line above to answer the questions on the next page.

Name: _____



Summer Camp Timeline

Comprehension Questions

1. On which day of the week did Elise play tag? _____

2. Which did Elise do first: participate in the water gun fight or run a relay race? _____

3. What did Elise do the day after the sack race? _____

4. Who won the sack race? _____

5. Did Elise win the marble shooting contest? _____

6. What did Elise do on the third day at camp? _____

7. Tell whether each sentence is true or false. Write **T** or **F** on each line.

_____ Elise's team won the relay race after Elise participated in the sack race.

_____ Elise played marbles three days before the water gun fight.

_____ Two days after she played marbles, Elise played tag.

_____ Elise beat Leann in a game of tag.

_____ Three days before the relay race, Elise played marbles.

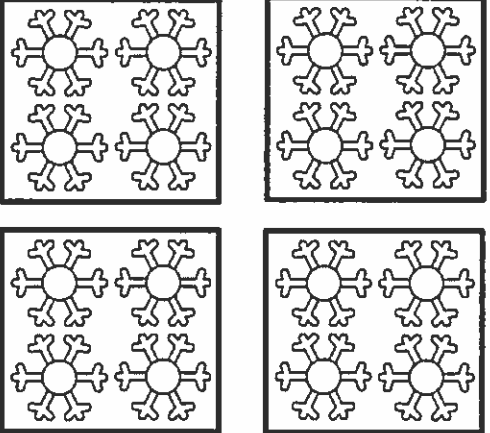
Name: _____

Date: _____

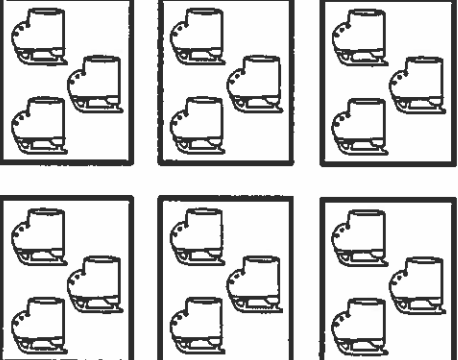
Winter Products

Directions

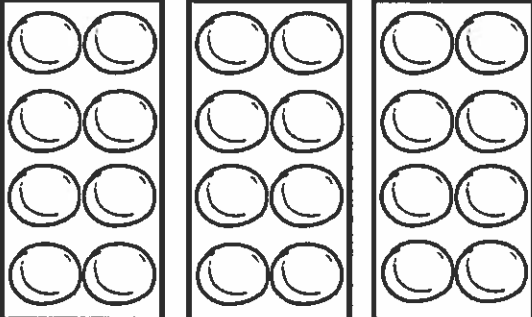
Write a multiplication equation in the box to match each picture.




Four boxes, each containing a 2x2 grid of snowflakes. Each box shows 4 snowflakes.



Six boxes, each containing two ice skates. Each box shows 2 ice skates.



Three boxes, each containing four snow globes. Each box shows 4 snow globes.



Four boxes, each containing five snow globes. Each box shows 5 snow globes.










Name: _____

Date: _____

Just the Facts!

Directions

Write a multiplication fact that will help you solve each division equation.



Solids, liquids, and gases



Background knowledge

Three *phases* of matter exist naturally on Earth: solids, liquids, and gases. Generally, solids are substances that retain their shape and do not flow. Liquids flow and take the shape of the container they are in. Gases also flow and fill all of the space available. Some types of matter can exist in all phases on our planet.

Science activity

Which of these materials are solids (S), which are gases (G), and which are liquids (L)? Circle the ones that exist in all three phases on Earth. Write S, G, or L in each box.



Cotton



Plastic



Wood



Jell-O



Air



Water vapor



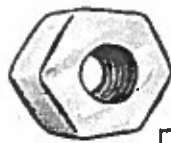
Wool



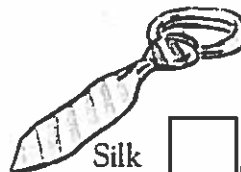
Water



Milk



Metal



Silk



Oxygen